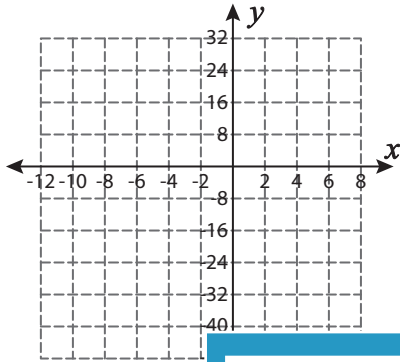


Proportional Relationship

Use the graph to tell whether x and y are in proportional relationship.

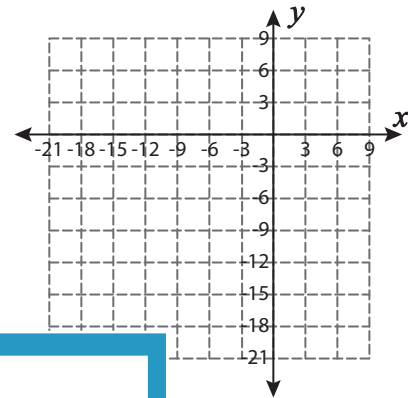
1)

x	-10	-8	-4	2	6
y	-40	-32	-16	8	24



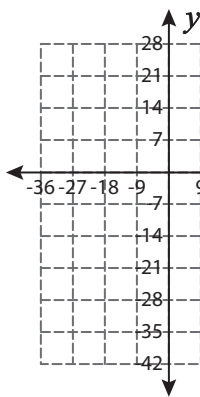
2)

x	-21	-15	-12	-9	-6
y	-6	0	3	6	9

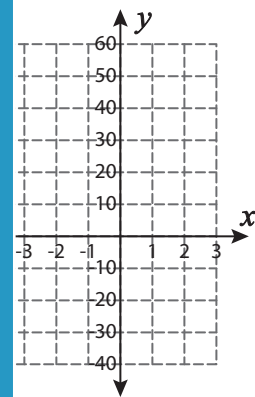


3)

x	-36	-18
y	-7	-14

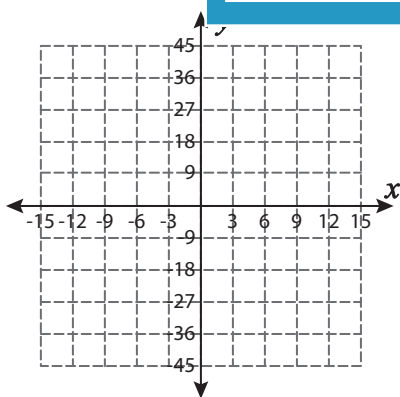


-1	1	2	3
10	-10	-20	-30

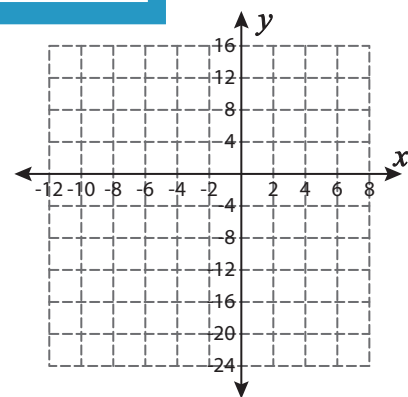


5)

x	-12	-12
y	36	18



-4	-2	2	4
16	-8	8	16



PREVIEW

Gain complete access to the largest collection of worksheets in all subjects!

Members, please log in to download this worksheet.

Not a member? Please sign up to gain complete access.

www.mathworksheets4kids.com