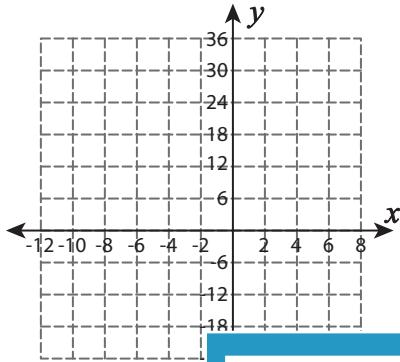


Proportional Relationship

Use the graph to tell whether x and y are in proportional relationship.

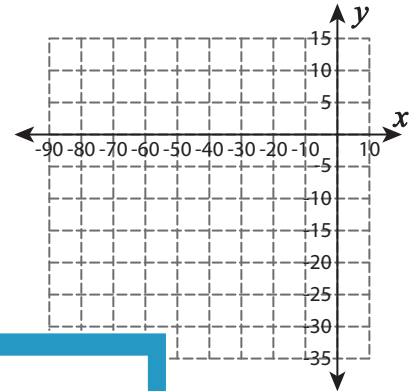
1)

| | | | | | |
|-----|-----|-----|---|----|-----|
| x | -2 | 0 | 2 | 4 | 8 |
| y | -24 | -12 | 0 | -6 | -18 |



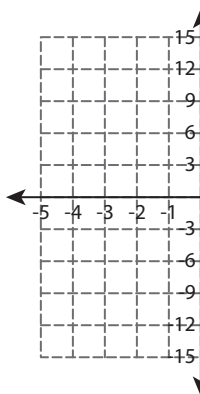
2)

| | | | | | |
|-----|-----|-----|-----|-----|-----|
| x | -70 | -60 | -40 | -20 | -10 |
| y | -35 | -30 | -20 | -10 | -5 |

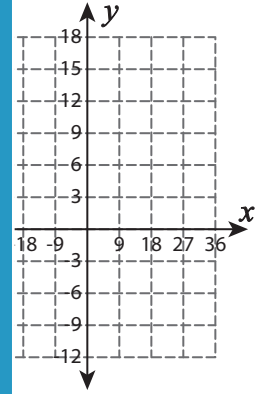


3)

| | | |
|-----|----|----|
| x | -3 | -1 |
| y | 9 | 3 |

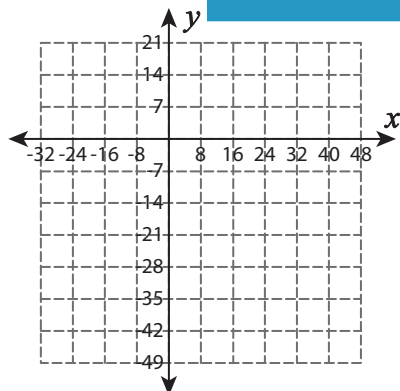


| | | | |
|----|-----|----|----|
| 27 | -18 | -9 | 9 |
| 3 | 0 | -3 | -9 |

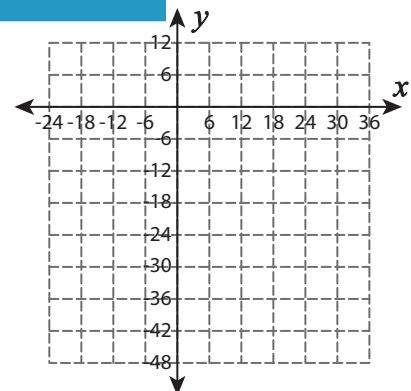


5)

| | | |
|-----|-----|-----|
| x | -32 | -16 |
| y | 14 | 7 |



| | | | |
|----|----|---|----|
| 12 | -6 | 6 | 12 |
| 12 | -6 | 6 | 12 |



PREVIEW

Gain complete access to the largest collection of worksheets in all subjects!

Members, please log in to download this worksheet.

Not a member? Please sign up to gain complete access.

www.mathworksheets4kids.com