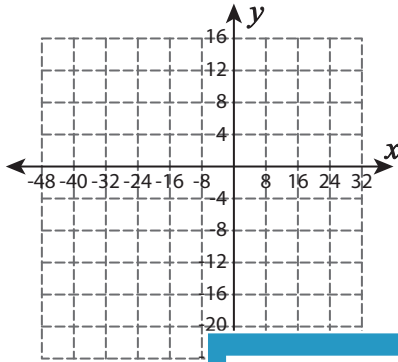


Proportional Relationship

Use the graph to tell whether x and y are in proportional relationship.

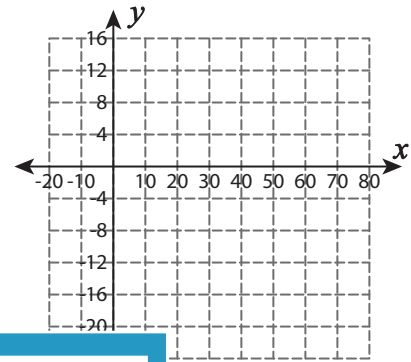
1)

x	-48	-32	-16	16	32
y	-12	-8	-4	4	8



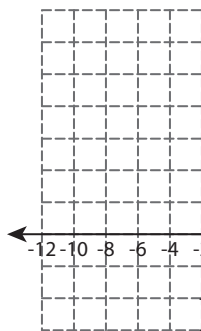
2)

x	-20	-10	10	30	40
y	8	4	-4	-12	-16

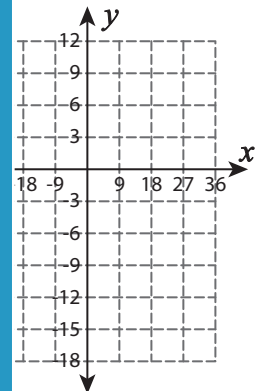


3)

x	-10	-6
y	25	25

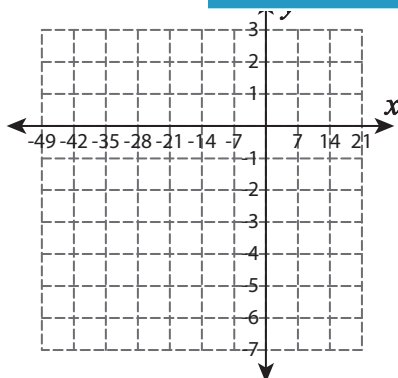


18	-9	9	18
12	-6	6	12

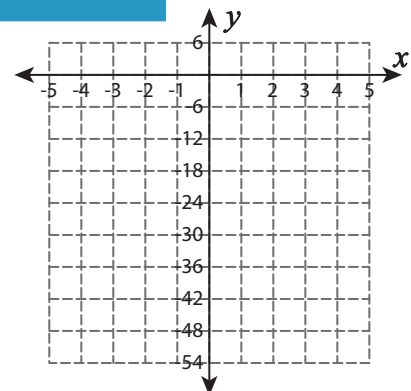


5)

x	-35	-28
y	-4	-4



0	1	2	3
24	-30	-36	-42



PREVIEW

Gain complete access to the largest collection of worksheets in all subjects!

Members, please log in to download this worksheet.

Not a member? Please sign up to gain complete access.

www.mathworksheets4kids.com