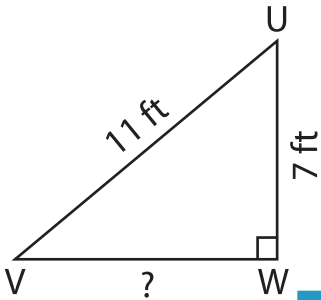


Name : _____

Pythagorean Theorem

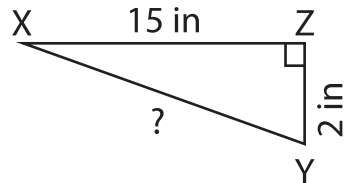
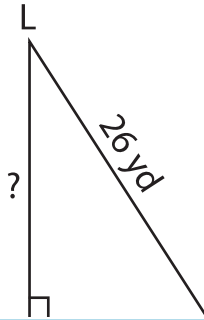
Determine the missing length in each right triangle using the Pythagorean theorem. Round the answer to the nearest tenth.

1)



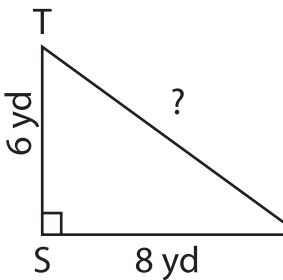
VW = _____

2)

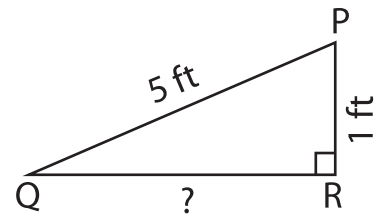


XY = _____

4)

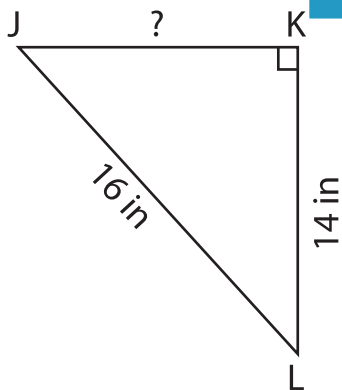


TU = _____

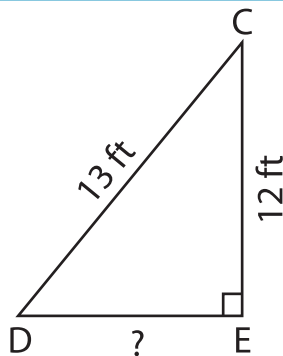


QR = _____

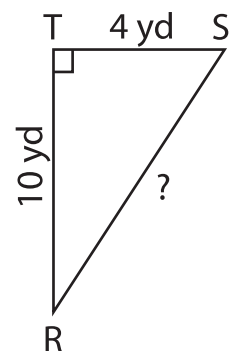
7)



JK = _____



DE = _____



RS = _____

PREVIEW

Gain complete access to the largest collection of worksheets in all subjects!

Members, please log in to download this worksheet.

Not a member? Please sign up to gain complete access.

www.mathworksheets4kids.com