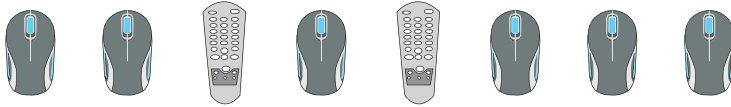


Name : \_\_\_\_\_

Level 2: S1

## Ratio: Part to Part

1)



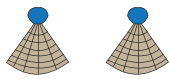
The ratio of  to  is \_\_\_\_\_.

2)



The ratio of \_\_\_\_\_ to \_\_\_\_\_ is \_\_\_\_\_.

3)



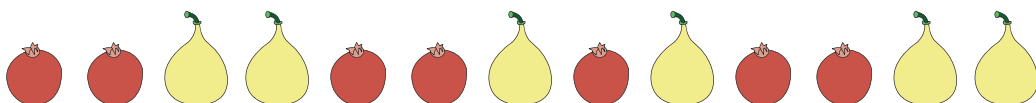
The ratio of \_\_\_\_\_ to \_\_\_\_\_ is \_\_\_\_\_.

4)



The ratio of \_\_\_\_\_ to \_\_\_\_\_ is \_\_\_\_\_.

5)



The ratio of  to  is \_\_\_\_\_.

**PREVIEW**

Gain complete access to the largest collection of worksheets in all subjects!

Members, please log in to download this worksheet.

Not a member? Please sign up to gain complete access.

[www.mathworksheets4kids.com](http://www.mathworksheets4kids.com)