



Name : _____

Level 2: 53


Match Kittens to Cats

Round the numbers on the kittens to the nearest hundred and help them to find their mom.




PREVIEW

Gain complete access to the largest collection of worksheets in all subjects!



Members, please log in to download this worksheet.

Not a member? Please sign up to gain complete access.



www.mathworksheets4kids.com

