

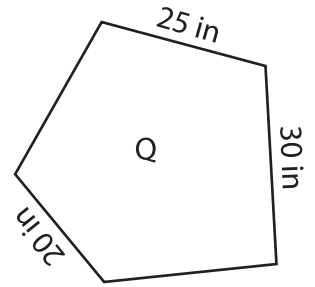
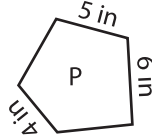
Name : \_\_\_\_\_

## Scale Factors - MCQ

Sheet 2

1) Which of the following is the scale factor of figure P to Q?

- a) 5 : 1      b) 1 : 10      c) 1 : 5



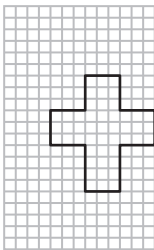
2) What happens to the new image if the scale factor of the original image to new image is 1 : 1?

- a) Remains same

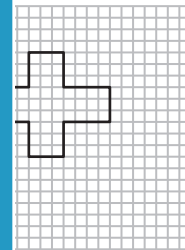
enlargement

3) Identify the scaled

- a)



**PREVIEW**  
Gain complete access to the largest collection of worksheets in all subjects!



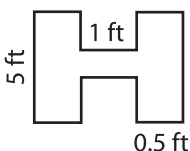
4) What would be the scale factor if the new image is larger than one?

- a) 10 ft

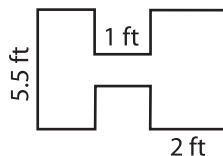
the scale factor is greater than one

5) Which of the following figures is the scaled copy of the figure B?

- a)



- b)



- c)

