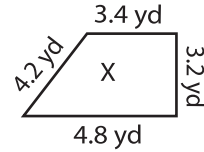


Name : \_\_\_\_\_

## Scale Factors - MCQ

Sheet 4

1) Which of the following figures is the scaled copy of the figure X?



- a)
- b)
- c)

2) Which would be the scale factor greater than one?

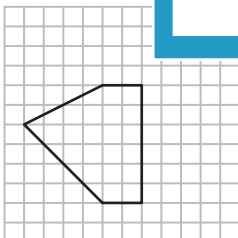
- a) 4.8 yd

3) Identify the scale factor.

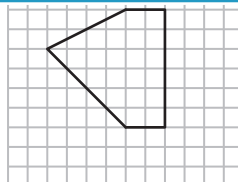
- a) 1 : 2.8

4) Identify the scaled copy.

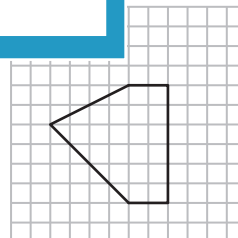
a)



b)



c)



5) What happens to the new image if the scale factor of the original image to new image is 1 : 5.4?

- a) Enlargement                      b) Reduction                      c) Remains same

**PREVIEW**

Gain complete access to the largest collection of worksheets in all subjects!

Members, please log in to download this worksheet.

Not a member? Please sign up to gain complete access.

[www.mathworksheets4kids.com](http://www.mathworksheets4kids.com)

and the scale factor is

3.5 ft

