

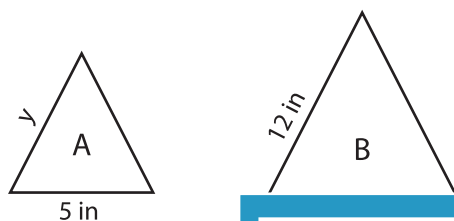
Name : _____

Scale Factor - Finding Sides

L1S1

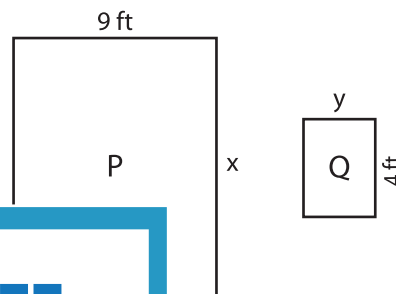
Find x and y.

1) Scale factor of A to B is 1 : 2



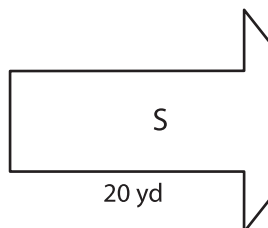
x = _____ ;

2) Scale factor of Q to P is 1 : 3



_____ ; y = _____

3) Scale factor of S to T



x = _____ ;

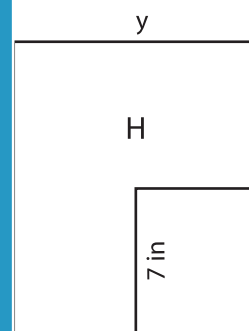
Gain complete access to the largest collection of worksheets in all subjects!

Members, please log in to download this worksheet.

Not a member? Please sign up to gain complete access.

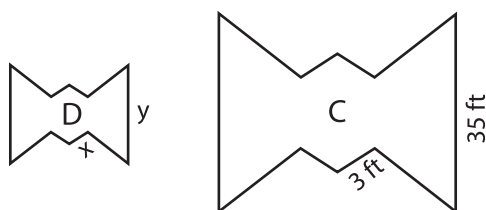
www.mathworksheets4kids.com

to H is 1 : 7



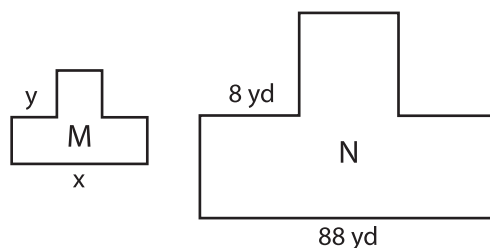
_____ ; y = _____

5) Scale factor of C to D



x = _____ ; y = _____

to M is 8 : 1



x = _____ ; y = _____