



Name : \_\_\_\_\_

# Skip Count - 10s to 100s


1) Count by 100s. How many cherries are there in all?




100



200



100



100

2) Count by 15s. How many roses are there in total?



15



15



15



15



15



15



15



15




15




15


3) Count by 25s. How many pomegranates are there in all?




25




25



25



25



25