






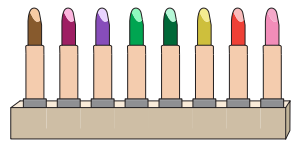
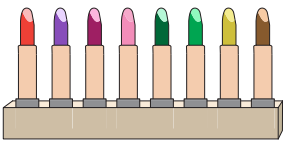
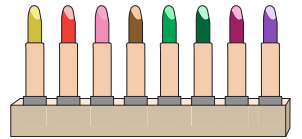
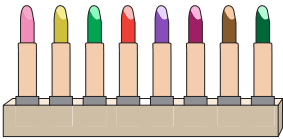
**Skip Count - 6s to 12s**

1) Count by 11s. How many flowers are there in total?








11

2) Count by 8s. How many \_\_\_\_\_



3) Count by 12s. How many \_\_\_\_\_



**PREVIEW**

Gain complete access to the largest collection of worksheets in all subjects!

Members, please log in to download this worksheet.

Not a member? Please sign up to gain complete access.

[www.mathworksheets4kids.com](http://www.mathworksheets4kids.com)