

Name : \_\_\_\_\_

## Skip Count - 2s to 5s

Sheet 2

- 1) Dahlia has 5 nickels in her handbag. A nickel is worth 5 cents. How many cents does she have in total? Identify the skip counting rule.



\_\_\_\_\_

- 2) Chloe is pinning stars on a bulletin board. A few stars have no numbers on them. Help Chloe find the missing numbers in the sequence. By what number did she skip count?



**PREVIEW**

Gain complete access to the largest collection of worksheets in all subjects!


Members, please log in to download this worksheet.

Not a member? Please sign up to gain complete access.

[www.mathworksheets4kids.com](http://www.mathworksheets4kids.com)




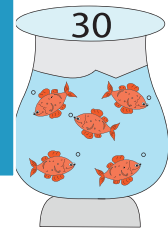
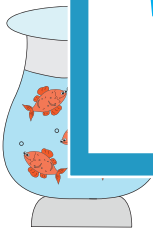
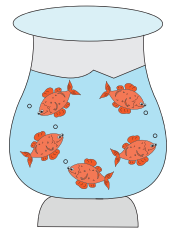
- 3) Avril has invited many friends to a party. She has 5 coffee mugs each, how many mugs does she have in all?



Gain complete access to the largest collection of worksheets in all subjects!

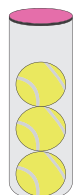
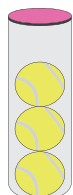
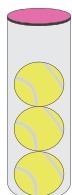
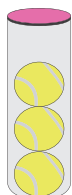
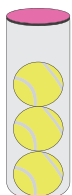
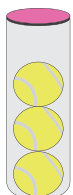
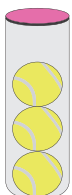
How many mugs does she have in all?

- 4) Benjamin bought 5 goldfish. He has 30 goldfish in all. Skip count to find the missing number.



How many goldfish does he have in all? Skip count to find the missing number.

- 5) A sports shop has 9 packs of tennis balls on display. Each pack contains 3 balls. How many tennis balls are there in all? Did you count by 5s?



\_\_\_\_\_