

Name : _____

Tally-Bakery

Sheet 1

Kayla and her friends bought some donuts, cupcakes and breads. Draw tally marks to show the number of items in each kind and answer the questions.






PREVIEW

Gain complete access to the largest collection of worksheets in all subjects!

Members, please log in to download this worksheet.

Not a member? Please sign up to gain complete access.

www.mathworksheets4kids.com

Bakery




- 1) Which item is the most? _____
- 2) How many more donuts did they buy than cupcakes? _____
- 3) Which item counts more than 8? _____
- 4) How many items are there in all? _____