





Name : _____

TRIP TO ZOO

Sheet 3

Mrs. Maria's class went on a field trip to the zoo. She asked the kids to vote for their favorite animal and recorded the results in a tally chart. Use the tally chart to answer the questions.

Animals	Tally Marks
 Tiger	
 Giraffe	
	
	

PREVIEW

Gain complete access to the largest collection of worksheets in all subjects!

Members, please log in to download this worksheet.

Not a member? Please sign up to gain complete access.

www.mathworksheets4kids.com

1) Which animal

2) How many mo

3) Were there animals with equal votes?
If yes, name the animals.

4) Which animal was most popular?

5) How many kids voted in all?