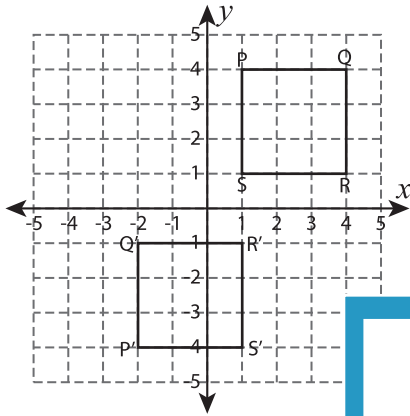


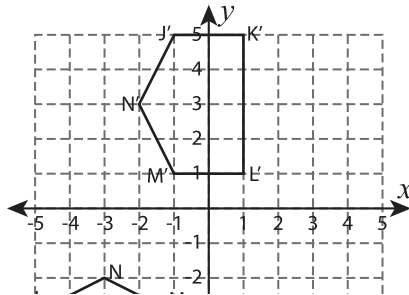
# Multiple Choice

Choose the correct transformation.

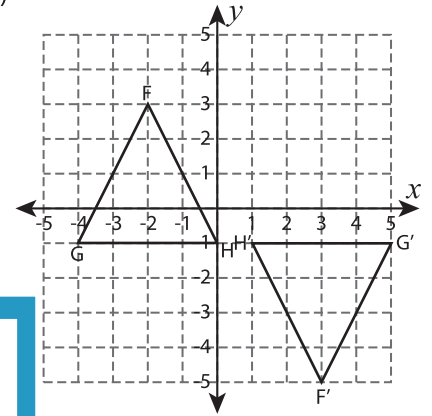
1)



2)



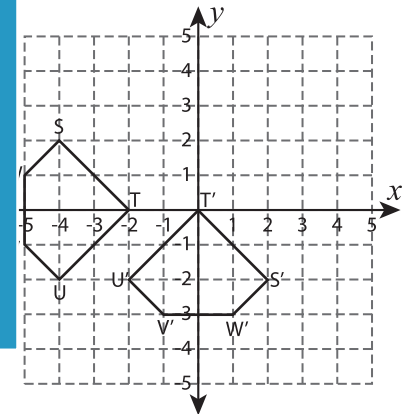
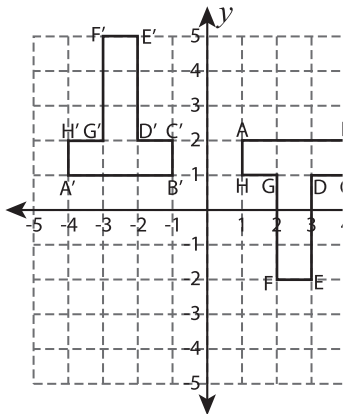
3)



- a) translated, then reflected
- b) reflected, then rotated
- c) translated, then rotated

- a) rotated, then translated
- b) reflected, then translated
- c) rotated, then reflected

4)



- a) translated, then reflected
- b) rotated, then reflected
- c) translated, then rotated

- a) rotated, then reflected
- b) translated, then rotated
- c) reflected, then translated

- a) translated, then reflected
- b) rotated, then reflected
- c) rotated, then translated

# PREVIEW

Gain complete access to the largest collection of worksheets in all subjects!

Members, please log in to download this worksheet.

Not a member? Please sign up to gain complete access.

[www.mathworksheets4kids.com](http://www.mathworksheets4kids.com)