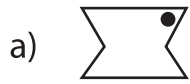



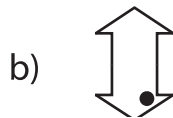
Multiple Choice

Choose the correct image which shows the transformation of each figure.

1) Rotation of  ?



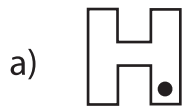
2) Reflection of  ?



3) Translation of



4) Rotation of



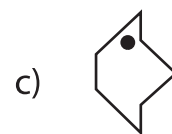
5) Reflection of




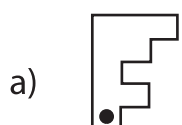
6) Translation of



7) Rotation of  ?



8) Reflection of  ?



PREVIEW

Gain complete access to the largest collection of worksheets in all subjects!

Members, please log in to download this worksheet.

Not a member? Please sign up to gain complete access.

www.mathworksheets4kids.com