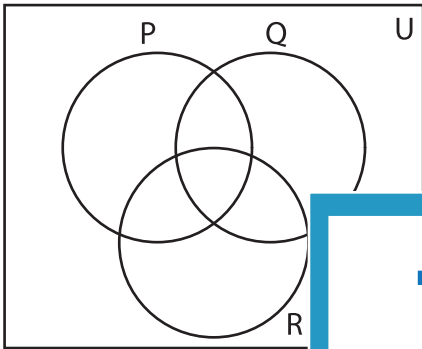


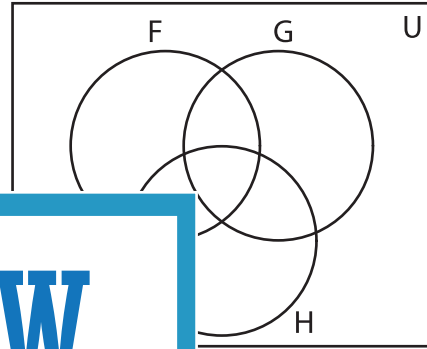
Venn Diagram

Complete the Venn diagram.

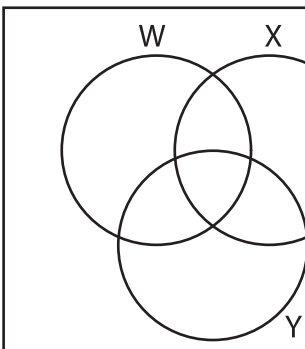
- 1) $U = \{5, 6, 8, 9, 10, 15, 25, 32, 37, 44\}$
 $P = \{5, 8, 25, 44\}$
 $Q = \{6, 10, 15, 44\}$
 $R = \{5, 15, 25, 32, 37, 44\}$




- 2) $U = \{21, 27, 33, 39, 41, 43, 45, 52, 66\}$
 $F = \{21, 27, 33\}$
 $G = \{27, 39, 43\}$
 $H = \{43, 45, 52\}$



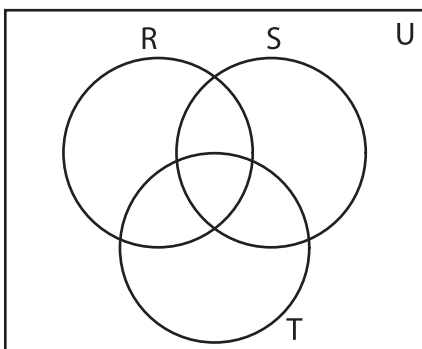
- 3) $U = \{1, 3, 6, 9, 11, 14, 17, 20, 22, 26, 27, 30\}$
 $W = \{1, 6, 9, 11, 14, 34\}$
 $X = \{1, 11, 14, 19, 25, 33, 30\}$
 $Y = \{1, 14, 25, 28, 30, 33, 26, 30\}$



- $12, 15, 17, 20, 22, 26, 27, 30\}$
 $30\}$
 $2, 26\}$
 $26, 30\}$

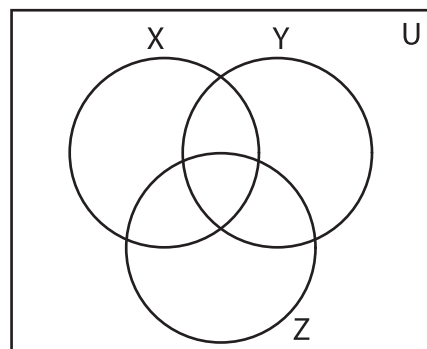


- 5) $U = \{34, 45, 47, 48, 49, 55, 56, 60\}$
 $R = \{34, 45, 47, 49, 55\}$
 $S = \{47, 49, 56, 58, 70, 75\}$
 $T = \{47, 55, 58, 64, 75\}$



- $45, 49, 52, 56, 60\}$
 $49\}$

- $Y = \{39, 45, 52, 60\}$
 $Z = \{45, 49, 56, 60\}$



PREVIEW

Gain complete access to the largest collection of worksheets in all subjects!

Members, please log in to download this worksheet.

Not a member? Please sign up to gain complete access.

www.mathworksheets4kids.com