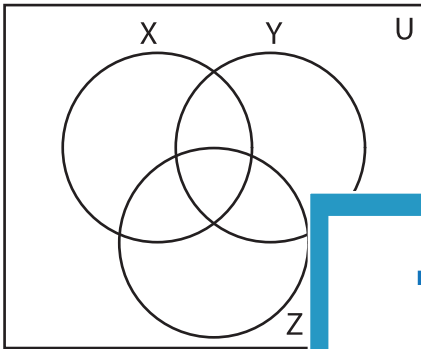


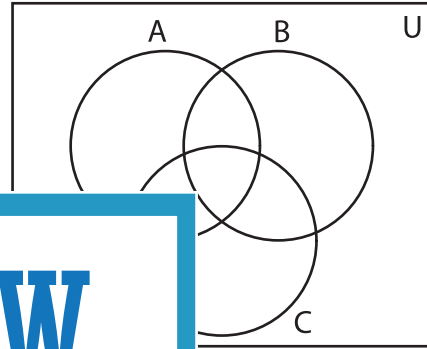
Venn Diagram

Complete the Venn diagram.

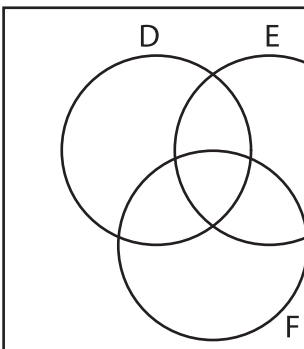
- 1) $U = \{4, 12, 17, 22, 26, 29, 30, 35, 36, 39, 42\}$
 $X = \{4, 12, 17, 26, 29\}$
 $Y = \{17, 30, 35, 36\}$
 $Z = \{4, 26, 35, 39, 42\}$




- 2) $U = \{1, 3, 5, 9, 11, 15, 19, 22, 28, 30, 38\}$
 $A = \{1, 3, 9, 11, 19\}$
 $B = \{11, 22, 28\}$
 $C = \{11, 19, 22, 30\}$



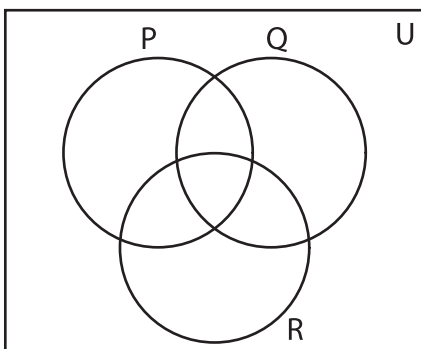
- 3) $U = \{9, 18, 27, 29, 35, 36, 39, 45, 51, 55, 58, 59, 61, 65, 73, 75, 77\}$
 $D = \{9, 27, 29, 35, 36, 39, 45, 51, 55, 58, 59, 61, 65, 73, 75, 77\}$
 $E = \{35, 36, 45, 51\}$
 $F = \{36, 39, 51, 58\}$



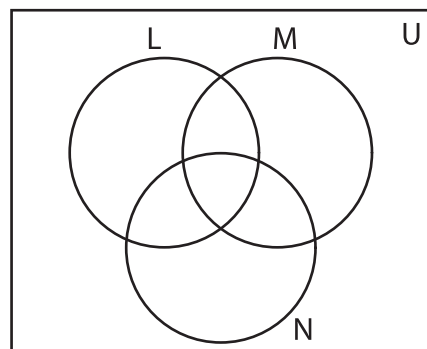
- $W = \{9, 18, 27, 29, 35, 36, 39, 45, 51, 55, 58, 59, 61, 65, 73, 75, 77\}$
 $X = \{35, 36, 45, 51\}$
 $Y = \{36, 39, 51, 58\}$



- 5) $U = \{5, 7, 26, 35, 36, 40, 45, 49, 51, 55, 56, 58, 64\}$
 $P = \{5, 7, 26, 35, 49\}$
 $Q = \{5, 7, 26, 36, 45, 51, 58\}$
 $R = \{5, 7, 35, 45, 51, 56\}$



- $M = \{49, 56, 58\}$
 $N = \{55, 58, 64\}$



PREVIEW

Gain complete access to the largest collection of worksheets in all subjects!

Members, please log in to download this worksheet.

Not a member? Please sign up to gain complete access.

www.mathworksheets4kids.com