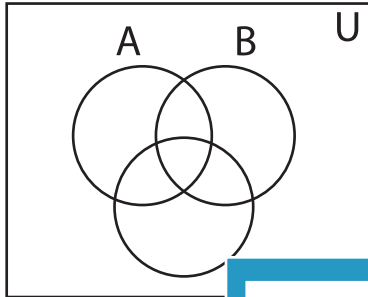


Shading - Venn Diagram

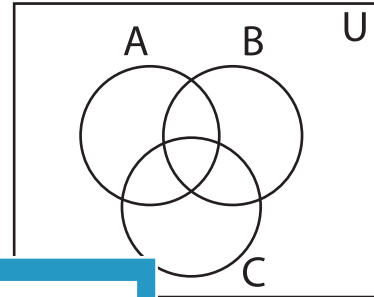
L1S2

Shade the given region.

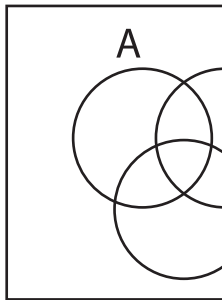
1) C'



2) $B' \cup A$



3) $A \cup B$




PREVIEW

Gain complete access to the largest
collection of worksheets in all subjects!


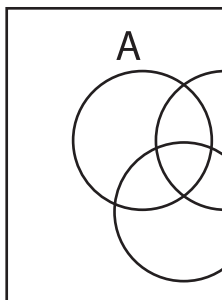
Members, please
log in to
download this
worksheet.

Not a member?
Please sign up to
gain complete
access.

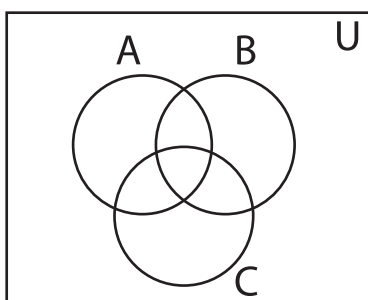
www.mathworksheets4kids.com



5) $(B \cap C)'$



7) $A' \cup B'$



8) $A' \cap C'$

