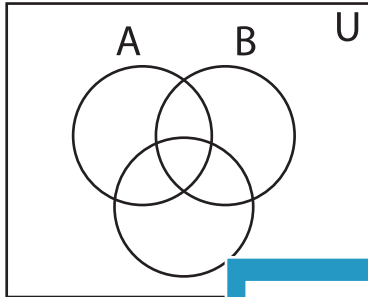


Shading - Venn Diagram

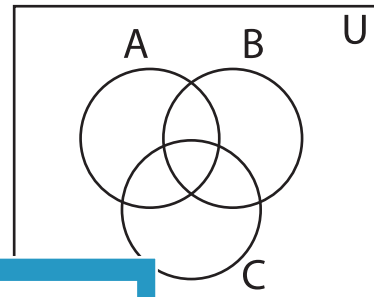
L2S1

Shade the given region.

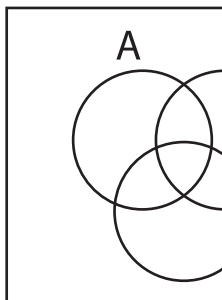
1) $(A \cap C)'$



2) $C' - B'$



3) $B - C$

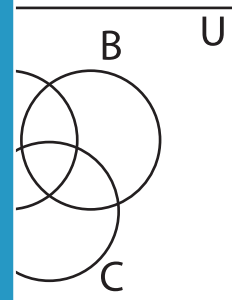


PREVIEW

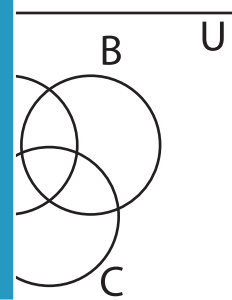
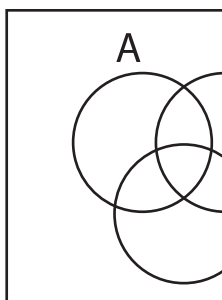
Gain complete access to the largest
collection of worksheets in all subjects!

Members, please
log in to
download this
worksheet.

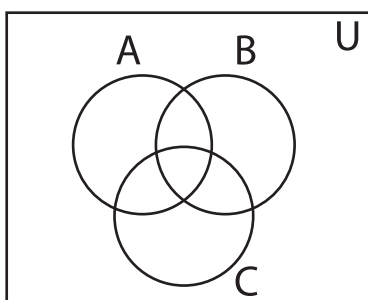
Not a member?
Please sign up to
gain complete
access.



5) $B' - A$



7) $A - B'$



8) $B \cup C$

