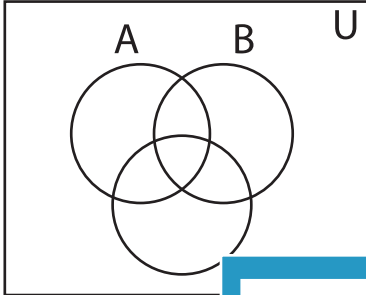


Shading - Venn Diagram

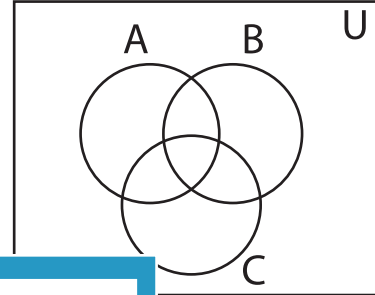
L2S4

Shade the given region.

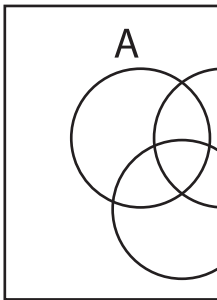
1) $A' \cup C$



2) $A' - C'$

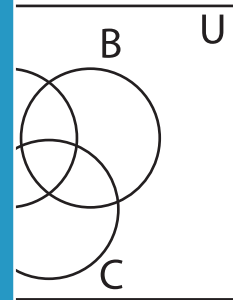


3) $(B - C)'$

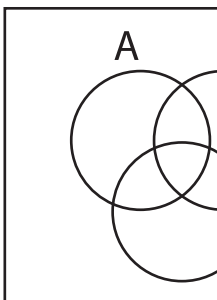


PREVIEW

Gain complete access to the largest
collection of worksheets in all subjects!

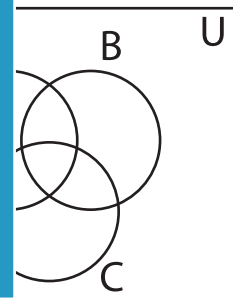


5) $A' - C$

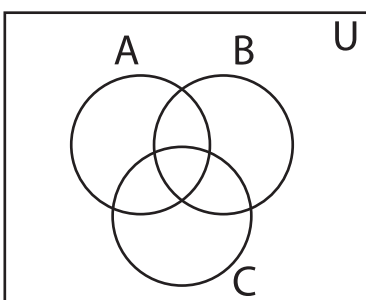


Members, please
log in to
download this
worksheet.

Not a member?
Please sign up to
gain complete
access.



7) $B' - C'$



8) $C - B'$

