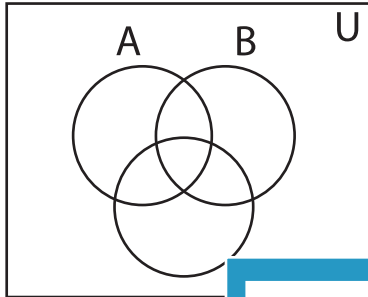


Shading - Venn Diagram

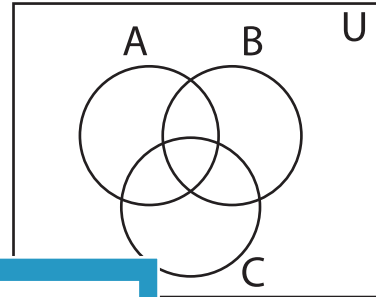
L3S4

Shade the given region.

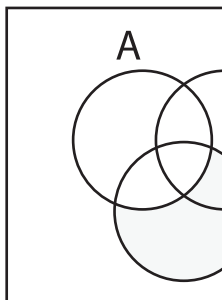
1) $(B' \cup C') - (A \cup C)'$



2) $(A \cap B)' \cap B'$



3) $C' \cap (B' - A')$



PREVIEW

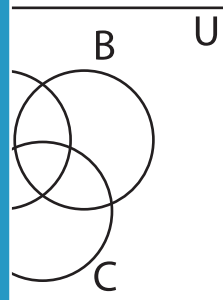
Gain complete access to the largest
collection of worksheets in all subjects!

Members, please
log in to
download this
worksheet.

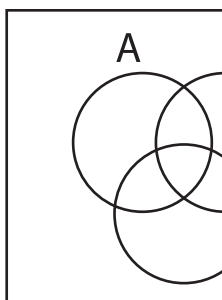
Not a member?
Please sign up to
gain complete
access.

www.mathworksheets4kids.com


4) $(A \cap B)$



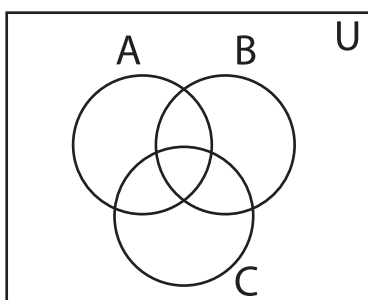
5) $(B' - A) \cap (A \cap B)$



6) $(C - A)'$



7) $A' - (A' \cap B')$



8) $(A' \cup C) \cap (B - C)$

