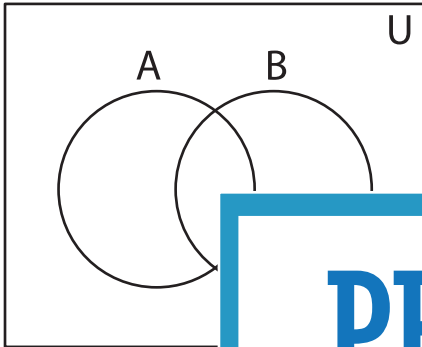


## Shading - Venn Diagram

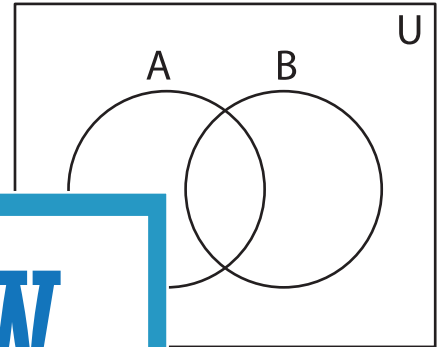
L2S1

Shade the given region.

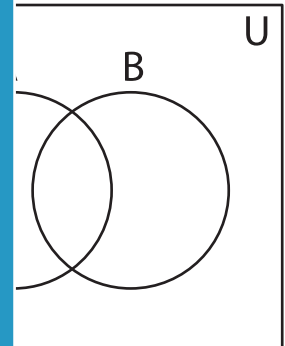
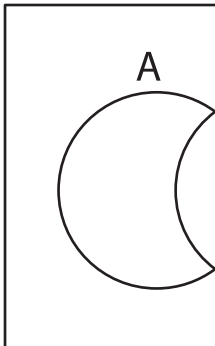
1)  $B - A$



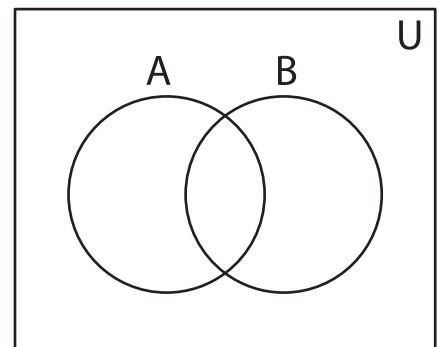
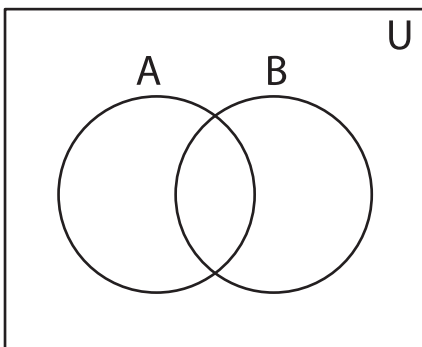
2)  $(A' - B)'$



3)  $A' \cap B'$



5)  $(A - B)'$



# PREVIEW

Gain complete access to the largest  
collection of worksheets in all subjects!

Members, please  
log in to  
download this  
worksheet.

Not a member?  
Please sign up to  
gain complete  
access.

[www.mathworksheets4kids.com](http://www.mathworksheets4kids.com)