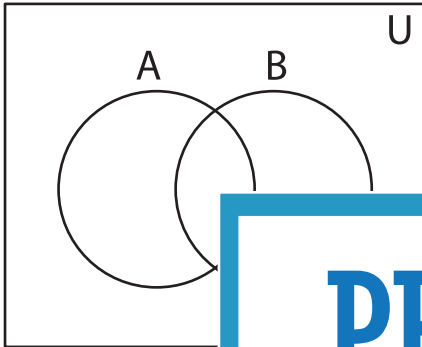


Shading - Venn Diagram

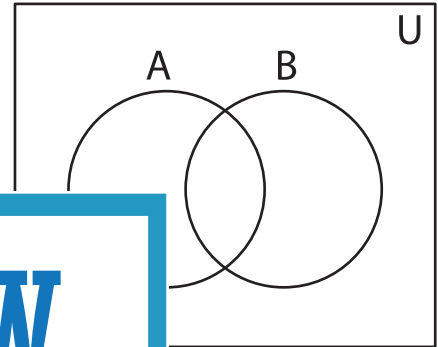
L2S2

Shade the given region.

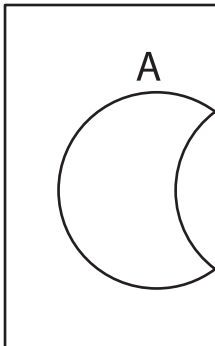
1) $(A \cap B)'$



2) $(B - A)'$



3) $A - B$



PREVIEW

Gain complete access to the largest
collection of worksheets in all subjects!

Members, please
log in to
download this
worksheet.

Not a member?
Please sign up to
gain complete
access.

www.mathworksheets4kids.com

5) $A' \cup B$

