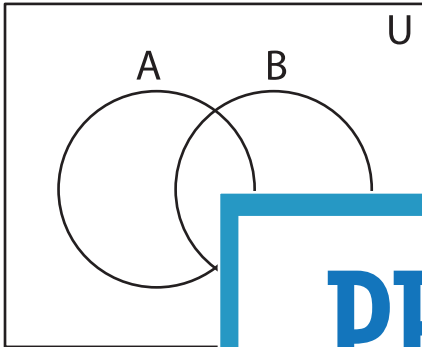


Shading - Venn Diagram

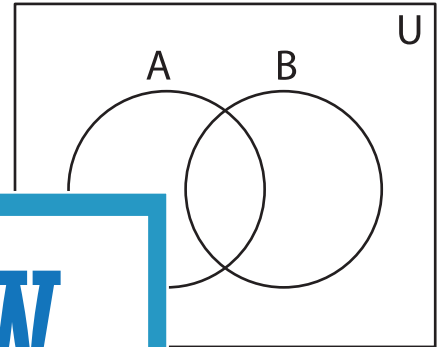
L2S3

Shade the given region.

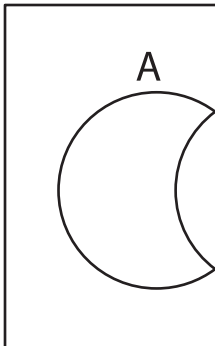
1) $A \cup B$



2) $B' - A$



3) $A' \cap B$



PREVIEW
Gain complete access to the largest
collection of worksheets in all subjects!

Members, please
log in to
download this
worksheet.

Not a member?
Please sign up to
gain complete
access.

www.mathworksheets4kids.com

5) $A - B'$

