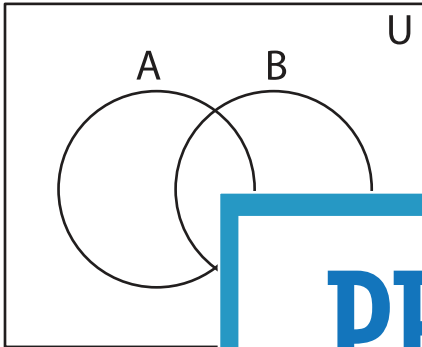


Shading - Venn Diagram

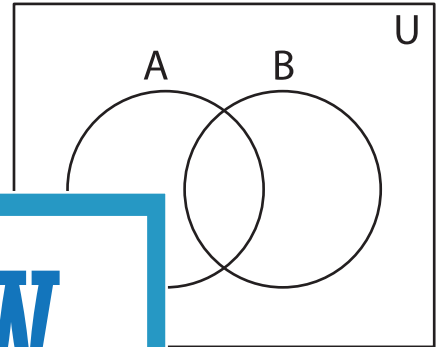
L2S5

Shade the given region.

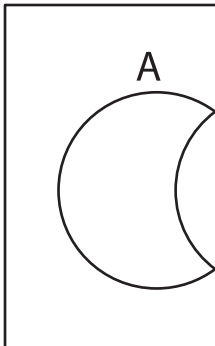
1) $A' - B'$



2) $B \cup B'$



3) $(A \cap B)'$



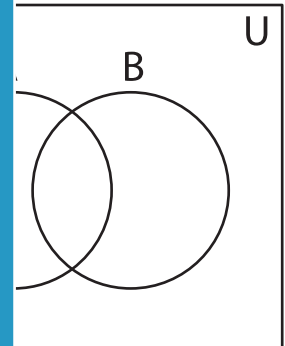
PREVIEW

Gain complete access to the largest
collection of worksheets in all subjects!

Members, please
log in to
download this
worksheet.

Not a member?
Please sign up to
gain complete
access.

www.mathworksheets4kids.com



5) $B - (A')$

