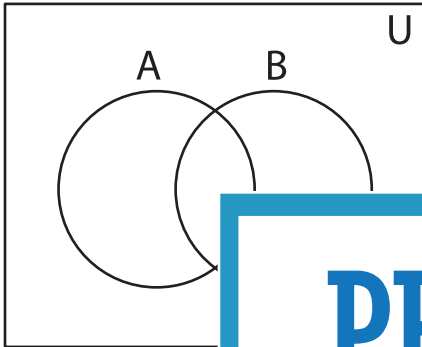


Shading - Venn Diagram

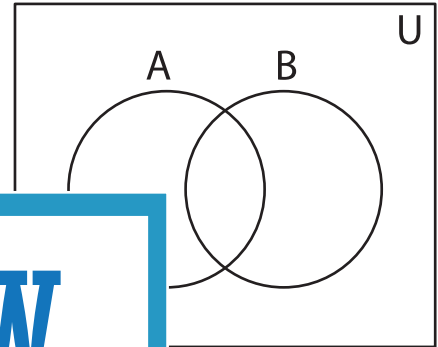
L3S2

Shade the given region.

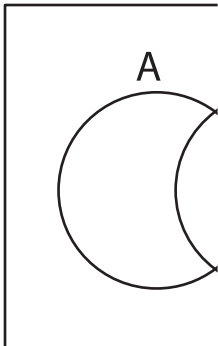
1) $(B' - A)' \cap (B \cup A')$



2) $(A' - B)' \cup B$



3) $(B' \cap A) - (A' \cap B)$



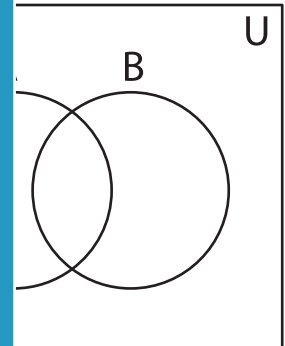
Gain complete access to the largest
collection of worksheets in all subjects!

Members, please
log in to
download this
worksheet.

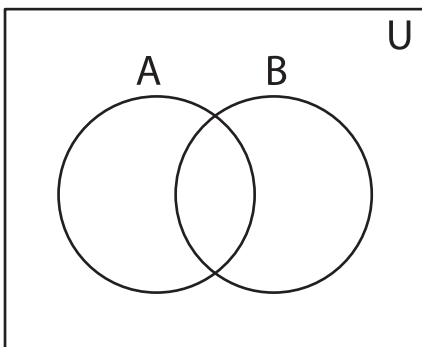
Not a member?
Please sign up to
gain complete
access.

www.mathworksheets4kids.com

B)



5) $(A - B)' \cup (A' \cap B)$



$(B' \cap A')$

