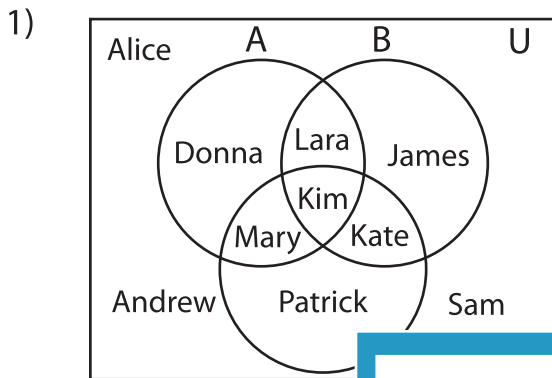


Venn Diagram

L1S3

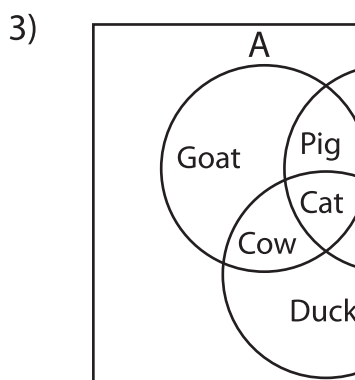
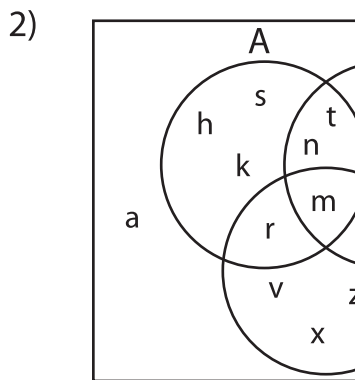
Perform the below mention boolean algebraic operation for the given set of elements.



i) $B =$ _____

ii) $B' \cap C' =$ _____

iii) $A \cup B =$ _____



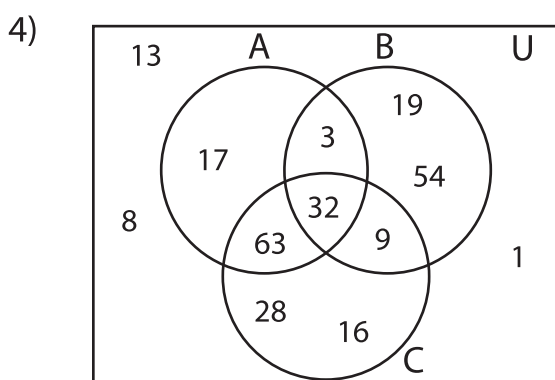
PREVIEW

Gain complete access to the largest collection of worksheets in all subjects!

Members, please log in to download this worksheet.

Not a member? Please sign up to gain complete access.

www.mathworksheets4kids.com



i) $C' =$ _____

ii) $A \cap B' =$ _____

iii) $(B' \cup C)' =$ _____