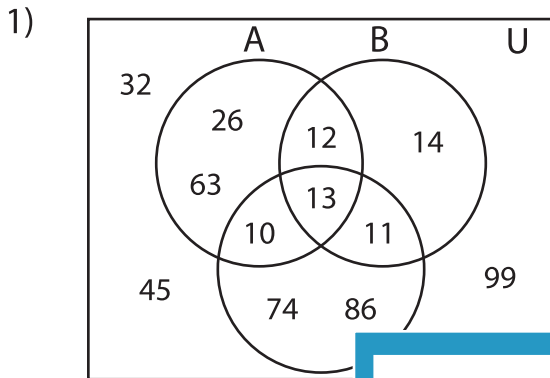


Venn Diagram

L2S5

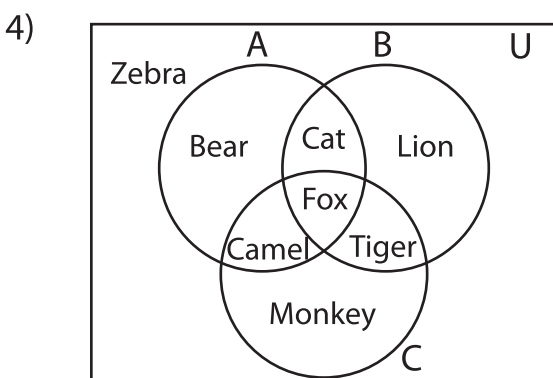
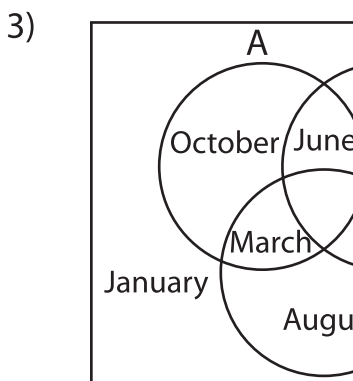
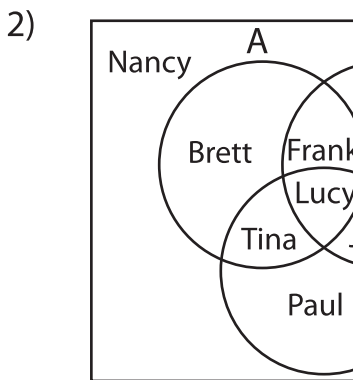
Perform the below mention boolean algebraic operation for the given set of elements.



i) $A' - B =$ _____

ii) $(C - A)' =$ _____

iii) $C - B =$ _____



i) $(A - B)' =$ _____

ii) $A \cup C' =$ _____

iii) $A' =$ _____

PREVIEW

Gain complete access to the largest collection of worksheets in all subjects!

Members, please log in to download this worksheet.

Not a member? Please sign up to gain complete access.

www.mathworksheets4kids.com
