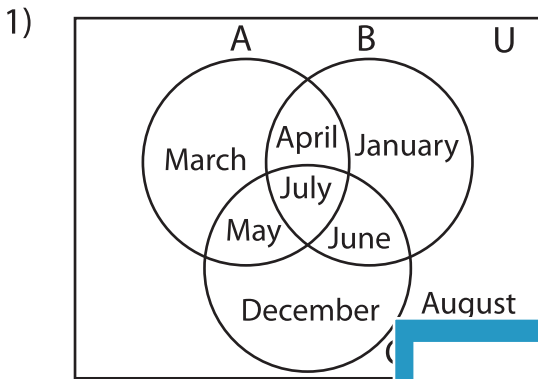


Venn Diagram

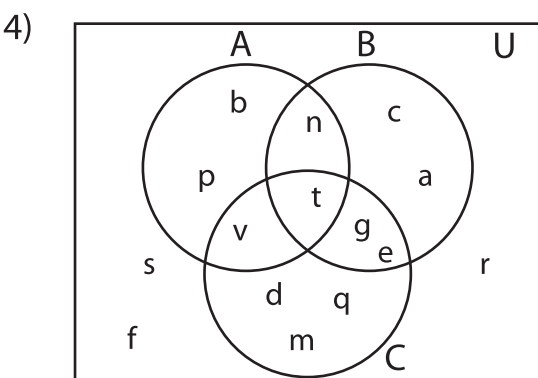
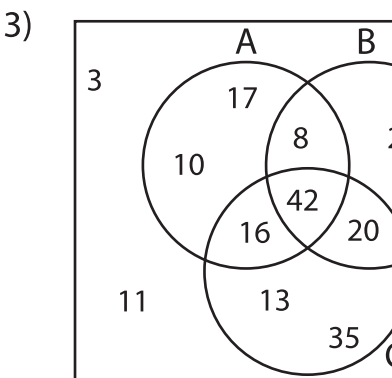
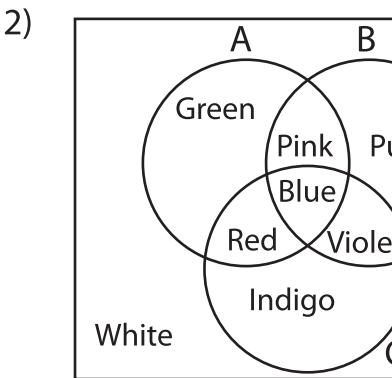
L3S2

Perform the below mention boolean algebraic operation for the given set of elements.



i) $(A' - B') \cup C =$ _____

ii) $(C - A) \cap A' =$ _____



i) $(C - A') \cap B =$ _____

ii) $(A \cup B') - (A' - C') =$ _____

iii) $A' \cap (B' - C') =$ _____

PREVIEW

Gain complete access to the largest collection of worksheets in all subjects!

Members, please log in to download this worksheet.

Not a member? Please sign up to gain complete access.

www.mathworksheets4kids.com
