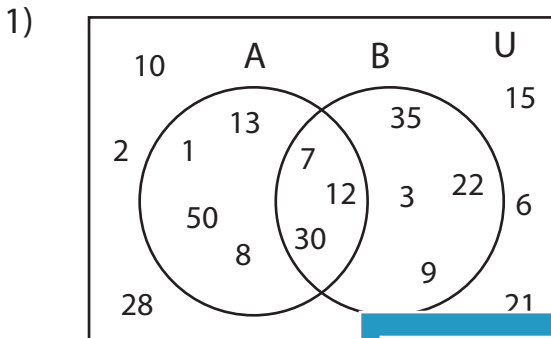


Venn Diagram

L151

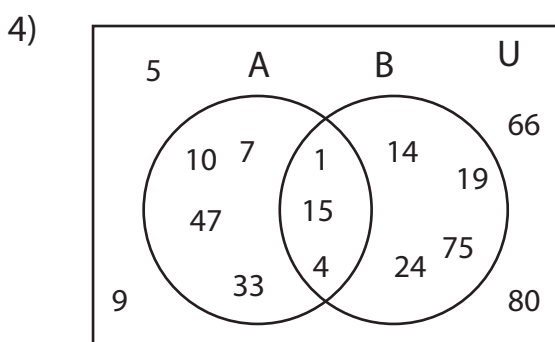
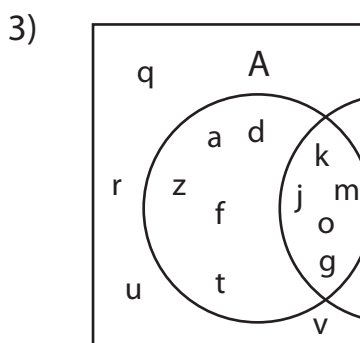
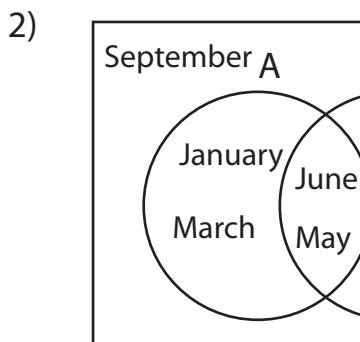
Perform the below mention boolean algebraic operation for the given set of elements.



i) B' = _____

ii) $A' \cap B$ = _____

iii) $A \cup B$ = _____



i) $A \cap B'$ = _____

ii) B = _____

iii) $A' \cup B$ = _____

PREVIEW

Gain complete access to the largest collection of worksheets in all subjects!

Members, please log in to download this worksheet.

Not a member? Please sign up to gain complete access.

www.mathworksheets4kids.com
