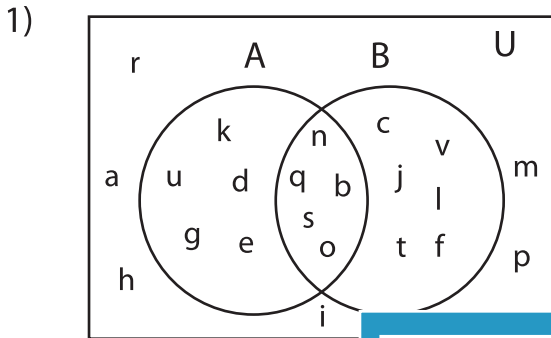


Venn Diagram

L154

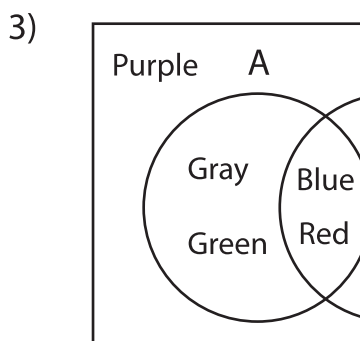
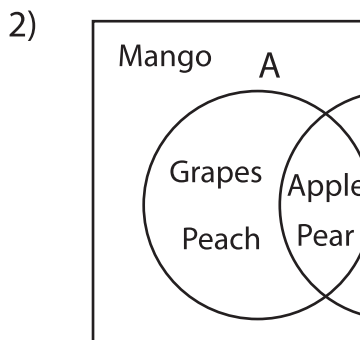
Perform the below mention boolean algebraic operation for the given set of elements.



i) A' = _____

ii) $A \cap B$ = _____

iii) $A \cap B'$ = _____



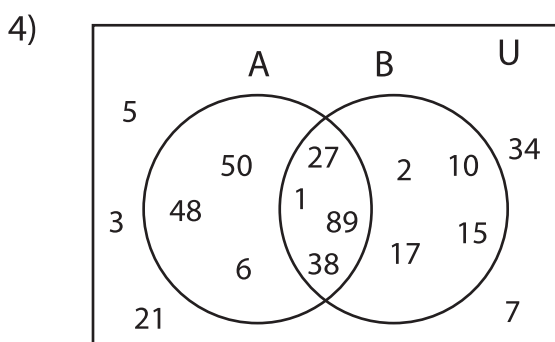
PREVIEW

Gain complete access to the largest collection of worksheets in all subjects!

Members, please
log in to
download this
worksheet.

Not a member?
Please sign up to
gain complete
access.

www.mathworksheets4kids.com



i) $A' \cap B'$ = _____

ii) B' = _____

iii) $(A' \cup B)'$ = _____