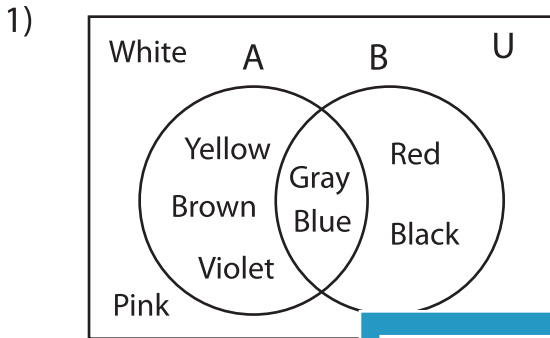


Venn Diagram

L155

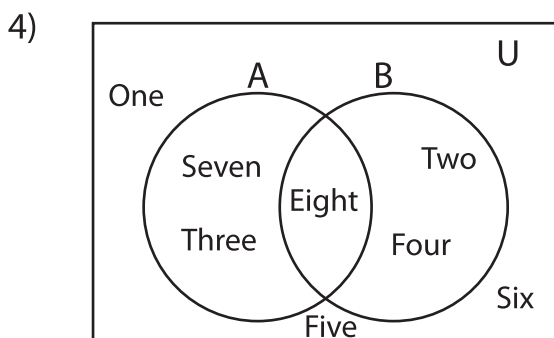
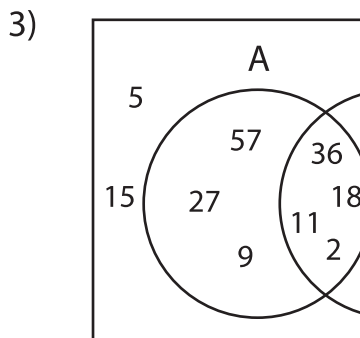
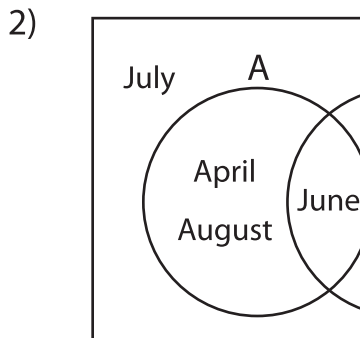
Perform the below mention boolean algebraic operation for the given set of elements.



i) $B =$ _____

ii) $A' \cap B' =$ _____

iii) $A' \cup B =$ _____



i) $B' =$ _____

ii) $A \cap B' =$ _____

iii) $(A \cup B)' =$ _____

PREVIEW

Gain complete access to the largest collection of worksheets in all subjects!

Members, please log in to download this worksheet.

Not a member? Please sign up to gain complete access.

www.mathworksheets4kids.com
