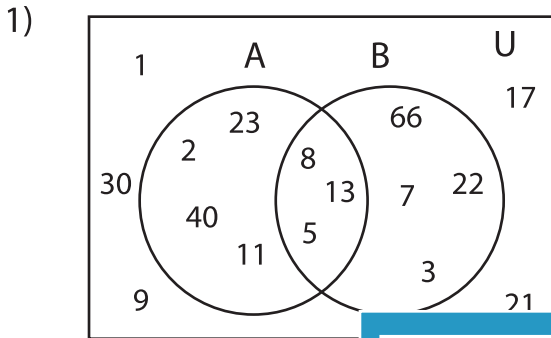


## Venn Diagram

L2S1

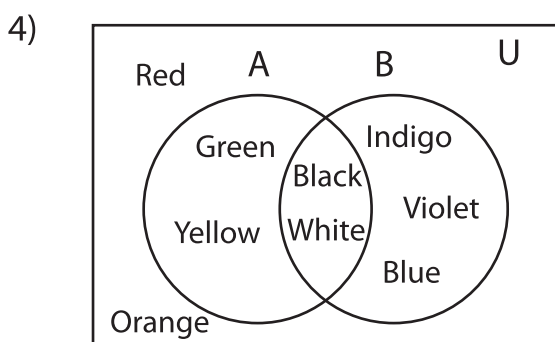
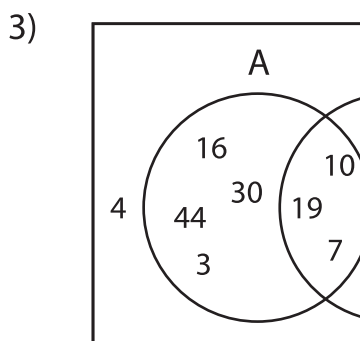
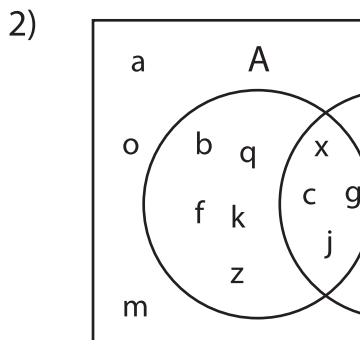
Perform the below mention boolean algebraic operation for the given set of elements.



i)  $A =$  \_\_\_\_\_

ii)  $A' \cup B =$  \_\_\_\_\_

iii)  $(B' - A)' =$  \_\_\_\_\_



i)  $A' \cap B' =$  \_\_\_\_\_

ii)  $B - A =$  \_\_\_\_\_

iii)  $A - B' =$  \_\_\_\_\_

# PREVIEW

Gain complete access to the largest collection of worksheets in all subjects!

Members, please  
log in to  
download this  
worksheet.

Not a member?  
Please sign up to  
gain complete  
access.

[www.mathworksheets4kids.com](http://www.mathworksheets4kids.com)

---

---

---

---

---

---

---

---