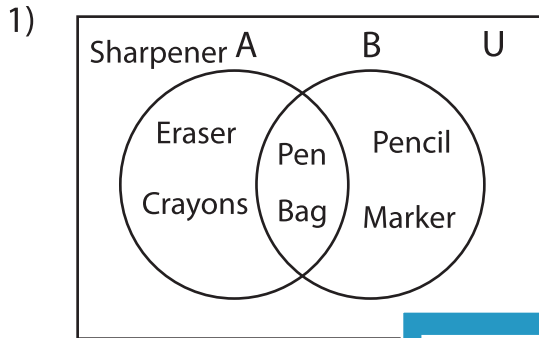


Venn Diagram

L3S2

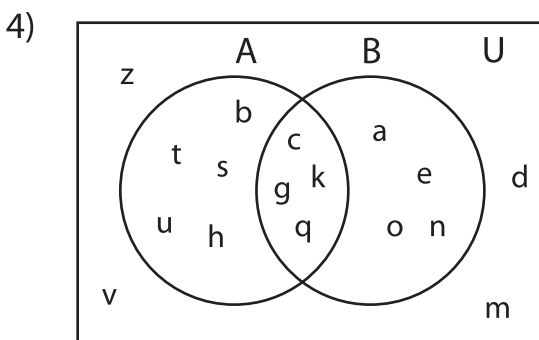
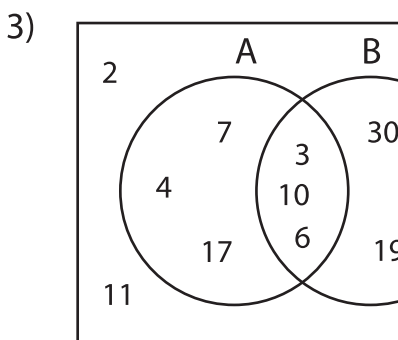
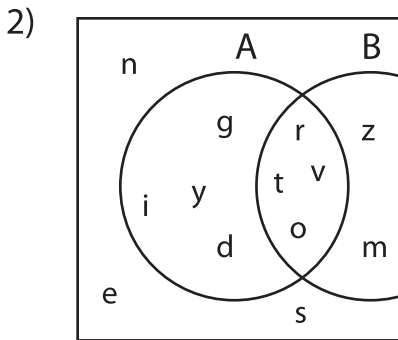
Perform the below mention boolean algebraic operation for the given set of elements.



i) $(A - B') \cup (B' - A) =$ _____

ii) $(A \cap B)' - (A' \cap B') =$ _____

iii) $(A' \cup B') \cap (B \cup A)' =$ _____



i) $(B' \cup A) \cap (A - B') =$ _____

ii) $(A - B)' - (A' \cap B) =$ _____

iii) $(B - A') \cup (A' - B) =$ _____

PREVIEW

Gain complete access to the largest collection of worksheets in all subjects!

Members, please log in to download this worksheet.

Not a member? Please sign up to gain complete access.

www.mathworksheets4kids.com
