
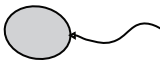



**Weight Estimation - Customary Units**




Sheet 2

Choose the object close to the given weight.

1) 1 pound

-  Tomato Puree
- 
-  Safety Matches




2) 3 pounds

- 
-  Wheat Flour
- 




3) 8 ounces

- 
-  Candy
- 




5) 2.5 pounds

-  Milk Powder
- 
- 

7) 5 ounces

- 
- 
-  Sugar

8) 6 pounds

- 
- 
- 

# PREVIEW

Gain complete access to the largest collection of worksheets in all subjects!

Members, please log in to download this worksheet.

Not a member? Please sign up to gain complete access.


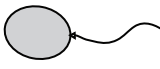

[www.mathworksheets4kids.com](http://www.mathworksheets4kids.com)

## Weight Estimation - Customary Units




Sheet 2

Choose the object close to the given weight.

1) 1 pound

- 
- 
- 




2) 3 pounds

- 
- 
- 




3) 8 ounces

- 
- 
- 




5) 2.5 pounds

- 
- 
- 

7) 5 ounces

- 
- 
- 

8) 6 pounds

- 
- 
- 

# PREVIEW

Gain complete access to the largest  
collection of worksheets in all subjects!

Members, please  
log in to  
download this  
worksheet.

Not a member?  
Please sign up to  
gain complete  
access.

[www.mathworksheets4kids.com](http://www.mathworksheets4kids.com)