


Weight Calculation - Metric Units


Calculate the weight.

1)



Weight of each  = _____ kg

2)



Weight of each  = _____ g

3)




PREVIEW

Gain complete access to the largest collection of worksheets in all subjects!

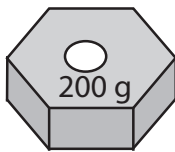
Members, please log in to download this worksheet.


Not a member? Please sign up to gain complete access.

www.mathworksheets4kids.com

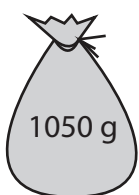
ch  = _____ g


4)




ch  = _____ g

5)




ch  = _____ g

6)



Weight of each  = _____ g

7)




Weight of each  = _____ g

Weight Calculation - Metric Units


Calculate the weight.

1)



Weight of each = 1½ kg

2)



Weight of each = 400 g

3)



PREVIEW

Gain complete access to the largest collection of worksheets in all subjects!

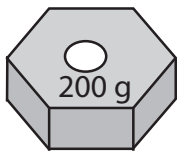
Members, please log in to download this worksheet.

Not a member? Please sign up to gain complete access.

www.mathworksheets4kids.com

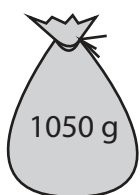
ch = 150 g

4)




ch = 50 g

5)




ch = 350 g

6)



Weight of each = 600 g

7)



Weight of each = 800 g