
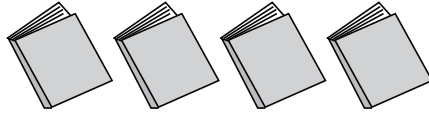



Weight Calculation - Metric Units

Calculate the weight.

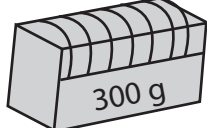
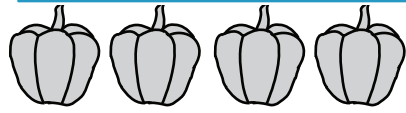

1)  =  Weight of each  = _____ g




2)  =  Weight of each  = _____ g

3)  = _____ ch  = _____ kg

4)  = _____ ch  = _____ g

5)  = _____ ch  = _____ g

6)  =  Weight of each  = _____ g

7)  =  Weight of each  = _____ g

PREVIEW

Gain complete access to the largest collection of worksheets in all subjects!

Members, please log in to download this worksheet.

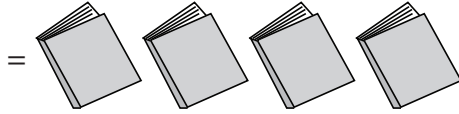
Not a member? Please sign up to gain complete access.

www.mathworksheets4kids.com

Weight Calculation - Metric Units

Calculate the weight.

1)



Weight of each  = 120 g

2)



Weight of each  = 600 g

3)



=

(


PREVIEW

Gain complete access to the largest collection of worksheets in all subjects!

Members, please log in to download this worksheet.

Not a member? Please sign up to gain complete access.

www.mathworksheets4kids.com


ch  = 2½ kg

4)



=

(


ch  = 175 g

5)

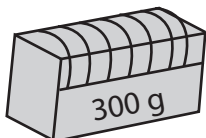


=

(

ch  = 400 g

6)



=



Weight of each  = 75 g

7)



=



Weight of each  = 900 g