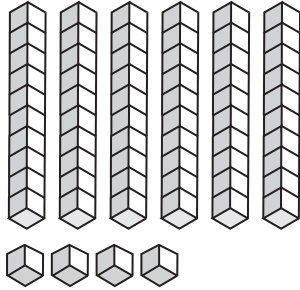


**Place Value Blocks - 2 Digits**

L1S1

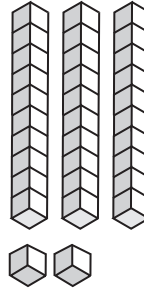
Write the number formed by base ten blocks.

1)



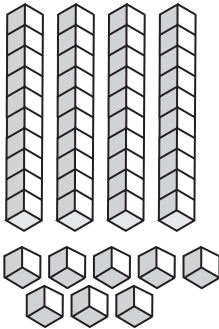
\_\_\_\_\_

2)



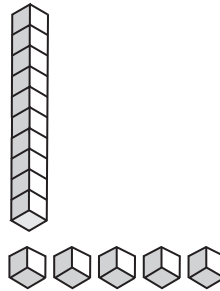
\_\_\_\_\_

3)



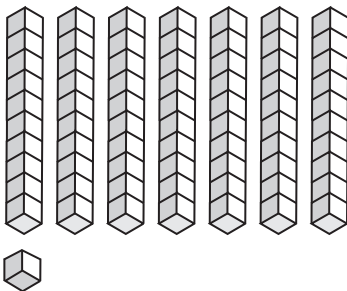
\_\_\_\_\_

4)



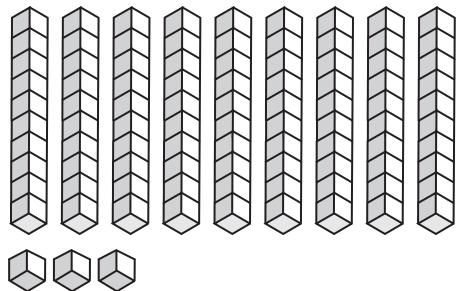
\_\_\_\_\_

5)



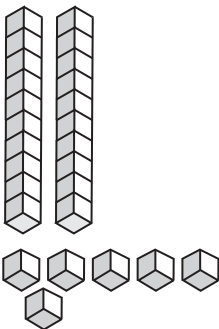
\_\_\_\_\_

6)




\_\_\_\_\_

7)



\_\_\_\_\_

8)



\_\_\_\_\_