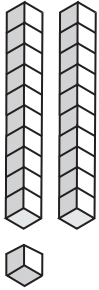


## Place Value Blocks - 2 Digits

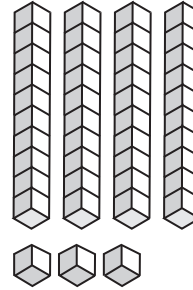
Write the number formed by base ten blocks.

1)




\_\_\_\_\_

2)



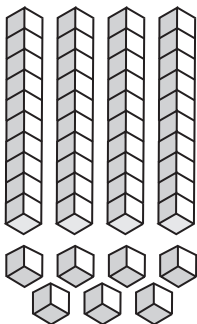
\_\_\_\_\_

3)



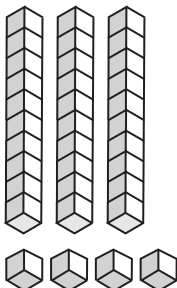
\_\_\_\_\_

5)



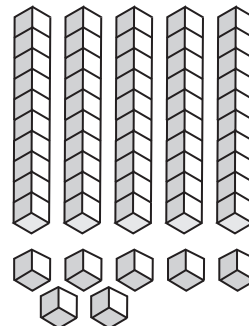
\_\_\_\_\_

7)



\_\_\_\_\_

8)



\_\_\_\_\_

# PREVIEW

Gain complete access to the largest  
collection of worksheets in all subjects!

Members, please  
log in to  
download this  
worksheet.

Not a member?  
Please sign up to  
gain complete  
access.

[www.mathworksheets4kids.com](http://www.mathworksheets4kids.com)