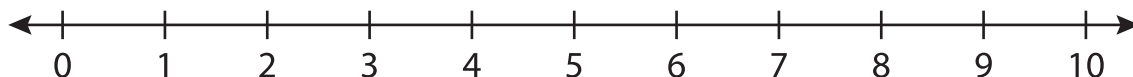


Number Line Subtraction

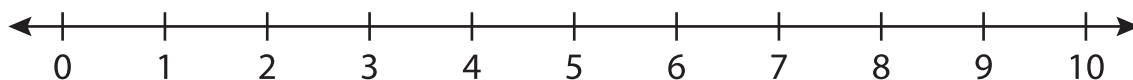
0-10: S1

Indicate hops on each number line and complete the subtraction sentences.

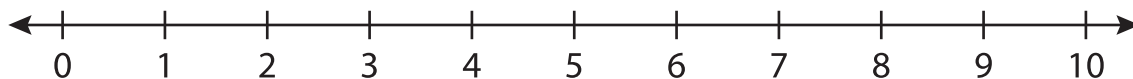
1) $7 - 4 =$ _____



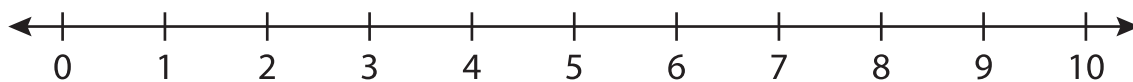
2) $9 - 2 =$ _____



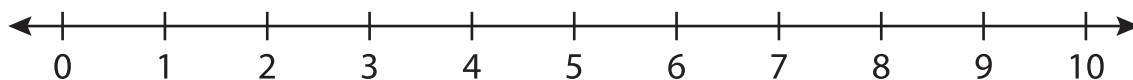
3) $10 - 9 =$ _____



4) $3 - 1 =$ _____



5) $8 - 3 =$ _____



6) $6 - 6 =$ _____

