

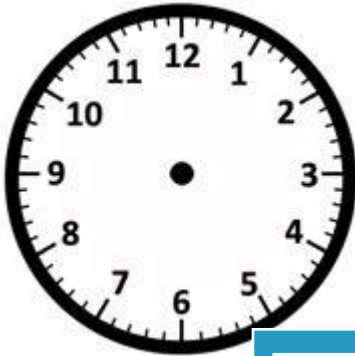
Name: \_\_\_\_\_

**Drawing Hands - Hours**

Sheet 1

Draw hands on each clock for the time given below:

1)




Time: 10:00

2)



6:00

3)



4)




Time: 5:00

Gain complete access to the largest collection of worksheets in all subjects!

Members, please log in to download this worksheet.


Not a member? Please sign up to gain complete access.

[www.mathworksheets4kids.com](http://www.mathworksheets4kids.com)



9:00

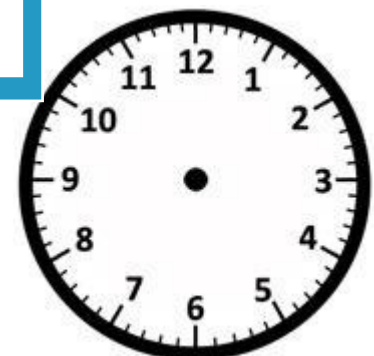
7)



Time: 4:00



Time: 11:00



Time: 8:00