

Name : \_\_\_\_\_

## Telling Time


5 minutes: S3

A) Read each clock, and write the time.


1)





2)



3)



4)




B) Choose the clock


Time : 4:05

[www.mathworksheets4kids.com](http://www.mathworksheets4kids.com)

C)



C) Choose the correct time shown by the clock.



A)

**5:15**

B)

**5:20**

C)

**4:20**