

Name : _____

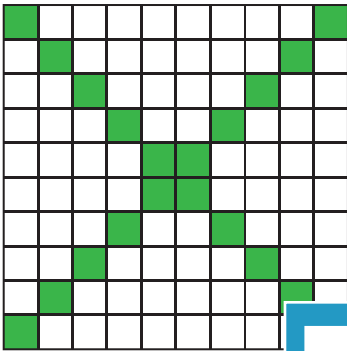
L1S4

Counting Squares

Find the area of each shape.


 = 1 square unit

1)

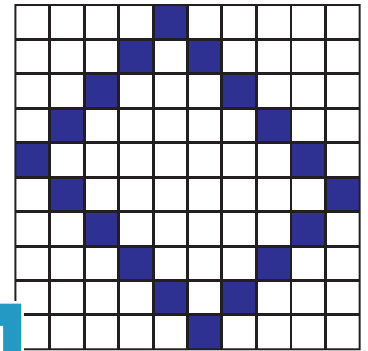


Area = square units

2)




3)



Area = square units

4)



Area = square units


PREVIEW

Gain complete access to the largest collection of worksheets in all subjects!

Members, please log in to download this worksheet.

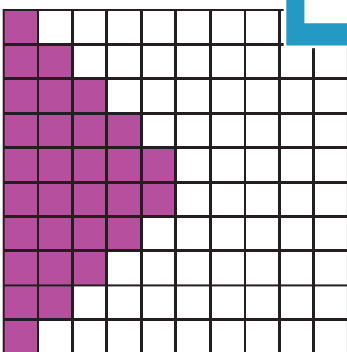
Not a member? Please sign up to gain complete access.

www.mathworksheets4kids.com




Area = square units

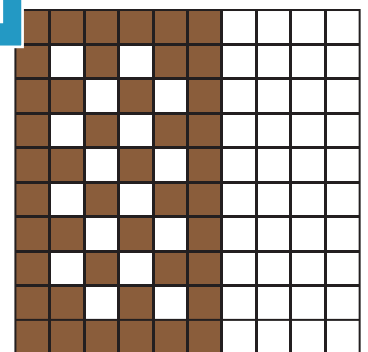
7)



Area = square units



Area = square units



Area = square units