


Capacity Estimation

Customary Units: S3


Estimate the capacity of each object.

1)



- 1 cup
- 2 quarts
- 3 pints

2)



- 3 pints
- 5 gallons
- 2 quarts

3)



- 6 quarts
- 1 cup
- 2 pints



- 2 quarts
- 1 gallon
- 3 pints

5)



- 1 pint
- 1 gallon
- 2 cups



- 1 cup
- 2 quarts
- 1 pint

PREVIEW


Gain complete access to the largest
collection of worksheets in all subjects!

Members, please
log in to
download this
worksheet.

Not a member?
Please sign up to
gain complete
access.

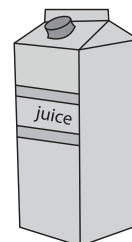
www.mathworksheets4kids.com

7)



- 1 gallon
- 3 quarts
- 1 pint

8)



- 1 pint
- 2 quarts
- 3 cups