

Name : _____

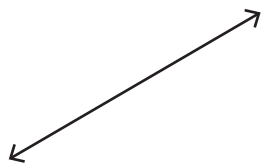
Points, Lines, Rays & Line segments

Sheet 2

Part - A

Write each as a point, line, ray or line segment.

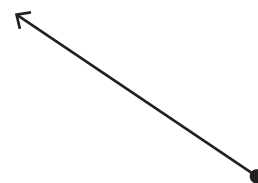
1)



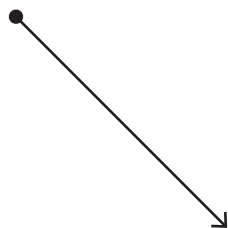
2)



3)



4)



PREVIEW

Gain complete access to the largest collection of worksheets in all subjects!

Members, please log in to download this worksheet.

Not a member? Please sign up to gain complete access.

www.mathworksheets4kids.com

Draw the following.

1) A ray

line