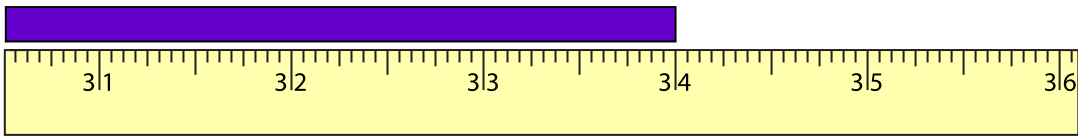


Name : \_\_\_\_\_

# U.S. Customary Unit Conversion

Example:



2 feet 10 inches

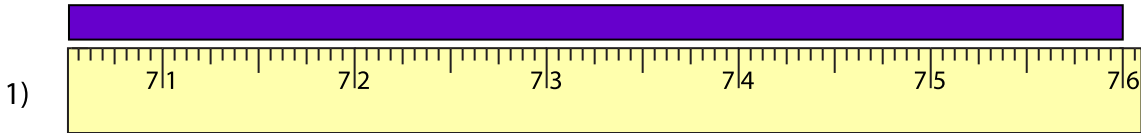
Length = 34 inches

**1 foot = 12 inches**

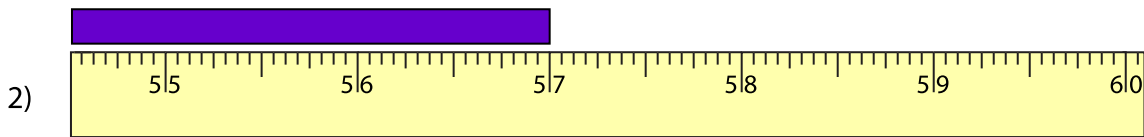
There are 2 feet 10 inches in 34 inches

$$\begin{array}{r} 2 \text{ - feet} \\ 12 \overline{) 34} \\ \underline{24} \\ 10 \text{ - inches} \end{array}$$

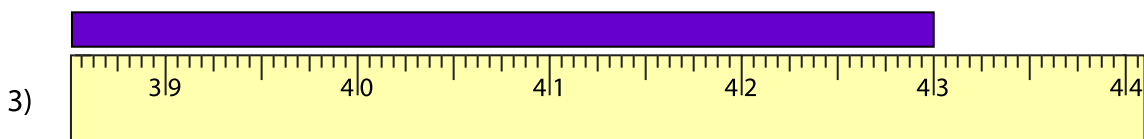
Measure the length of each strip of paper using the ruler. Write your answer in feet and inches.



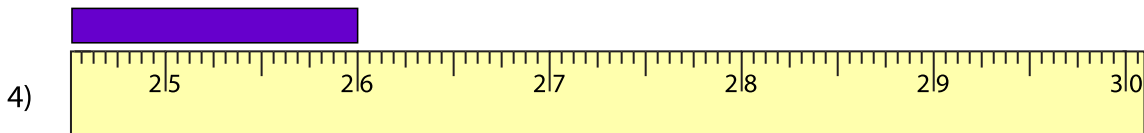
\_\_\_\_\_ feet \_\_\_\_\_ inches



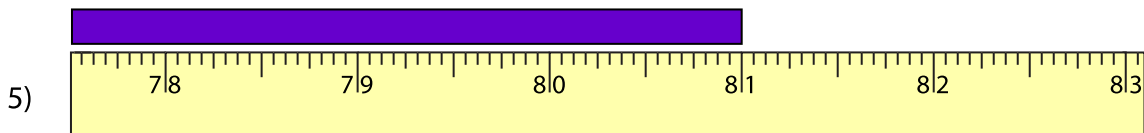
\_\_\_\_\_ feet \_\_\_\_\_ inches



\_\_\_\_\_ feet \_\_\_\_\_ inches



\_\_\_\_\_ feet \_\_\_\_\_ inches



\_\_\_\_\_ feet \_\_\_\_\_ inches