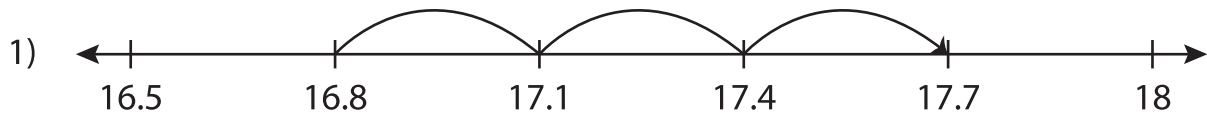


Name : _____

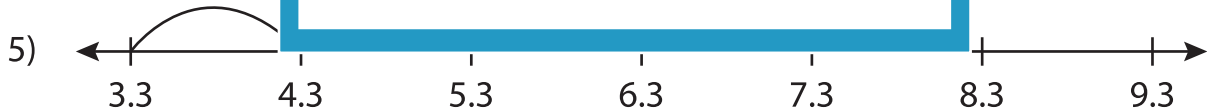
Number Line Addition

Tenth: S5

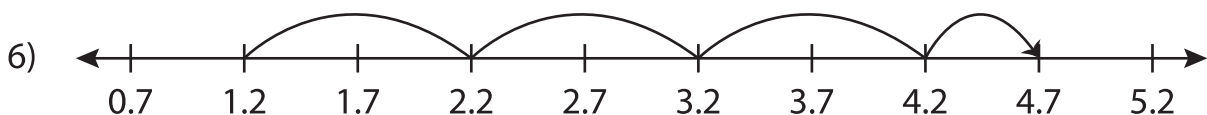
Read each number line and solve the problem.



$$16.8 + 0.9 = \underline{\hspace{2cm}}$$



$$3.3 + 4 = \underline{\hspace{2cm}}$$



$$1.2 + 3.5 = \underline{\hspace{2cm}}$$

PREVIEW

Gain complete access to the largest collection of worksheets in all subjects!

Members, please log in to download this worksheet.

Not a member? Please sign up to gain complete access.

www.mathworksheets4kids.com