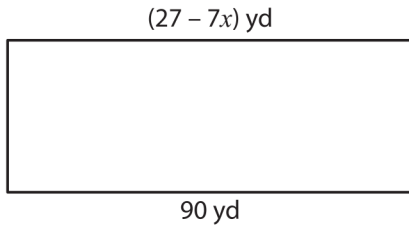


Name : _____

Solving Equations - Rectangles

Find the value of x .

1)



$x =$ _____

2)



$x =$ _____

3)



$x =$ _____

PREVIEW

Gain complete access to the largest collection of worksheets in all subjects!

Members, please log in to download this worksheet.

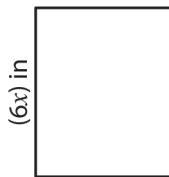
Not a member? Please sign up to gain complete access.

www.mathworksheets4kids.com

$x + 65$ yd

39 yd

5)




$x =$ _____

2 ft

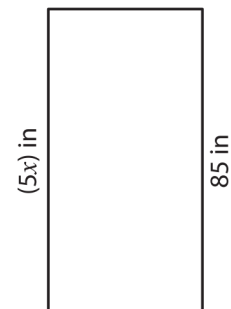
$\frac{x}{9}$ ft

7)



$x =$ _____

8)



$x =$ _____