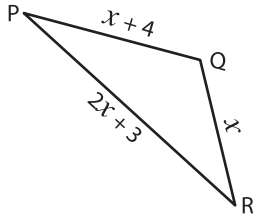


Missing Sides

Find the value of x and compute the length of the sides for each triangle.

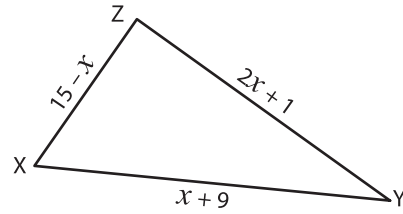
1)



Perimeter = 47 m ; $x =$ _____ ;

PR = _____ ; QR = _____ ; PQ = _____

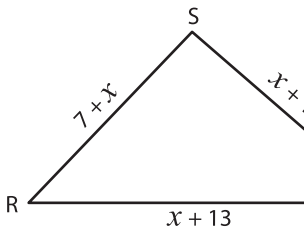
2)



Perimeter = 39 mm ; $x =$ _____ ;

XY = _____ ; YZ = _____ ; XZ = _____

3)



Perimeter = 78 cm ; $x =$ _____

RT = _____ ; ST = _____

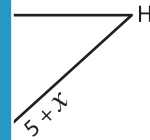
PREVIEW

Gain complete access to the largest
collection of worksheets in all subjects!

Members, please
log in to
download this
worksheet.

Not a member?
Please sign up to
gain complete
access.

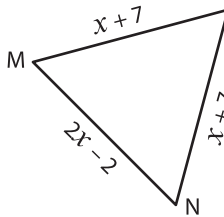
www.mathworksheets4kids.com



_____ ;

_____ ; FH = _____

5)



Perimeter = 48 mm ; $x =$ _____

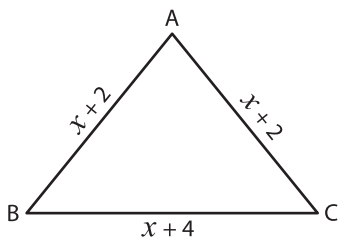
MN = _____ ; LN = _____



_____ ;

_____ ; DF = _____

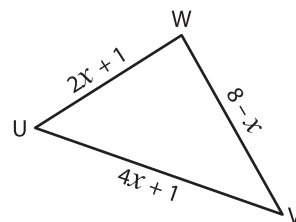
7)



Perimeter = 17 cm ; $x =$ _____ ;

BC = _____ ; AB = _____ ; AC = _____

8)



Perimeter = 20 mm ; $x =$ _____ ;

UV = _____ ; VW = _____ ; UW = _____